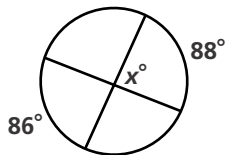


# Practice 11-4

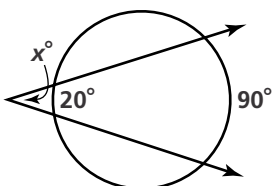
## Angle Measures and Segment Lengths

Find the value of  $x$ .

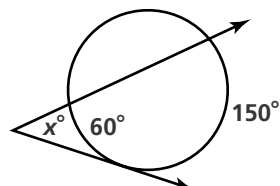
1.



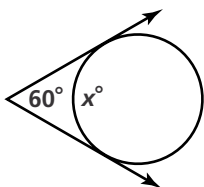
2.



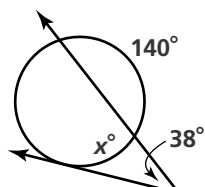
3.



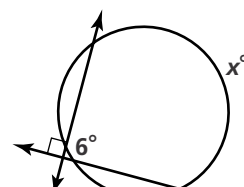
4.



5.

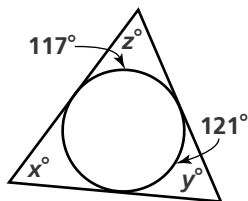


6.

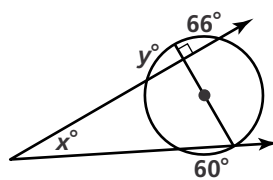


**Algebra** Find the value of each variable using the given chords, secants, and tangents. If your answer is not a whole number, round it to the nearest tenth.

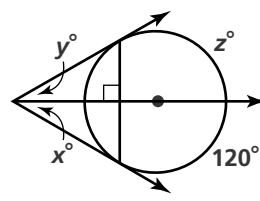
7.



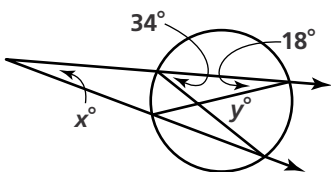
8.



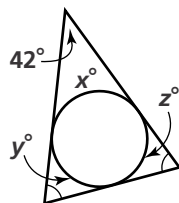
9.



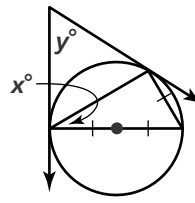
10.



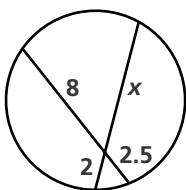
11.



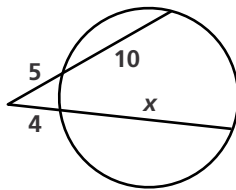
12.



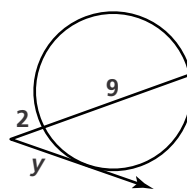
13.



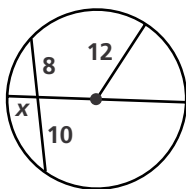
14.



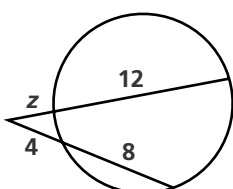
15.



16.



17.



18.

